




Dying plants





What to do

Here are some plants.

1. Water
No plant food
Sunlight




2. No water
Plant food
Sunlight



3. Water
Plant food
Grown in the dark



4. Water
Plant food
Sunlight



Which do you think will grow the best? **1 2 3 4** (Circle the correct one)

Why will the rest not grow so well?

.....
You could investigate this.



Think and do

A plant will not grow on the moon's surface because

.....
.....